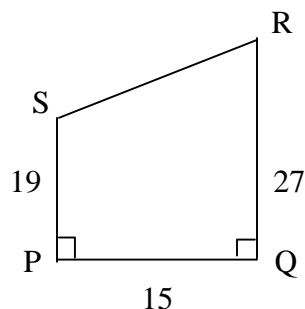


Round 1 Individuals States 2011

3 pts 1. Find the area of quadrilateral PQRS.



Ans. _____

4 pts 2. A store prices an item in dollars and cents so that when a 5% sales tax is added to the price, no rounding is necessary on the total cost, because the price of the item plus the tax results is exactly n dollars. Find the smallest value for n , where n is an integer.

Ans. _____

5 pts 3. The 7th term of an arithmetic series is 59. The 19th term is 131. If there are 61 terms in the series, find the sum of all the terms.

Ans. _____

Round 2 Individuals States 2011

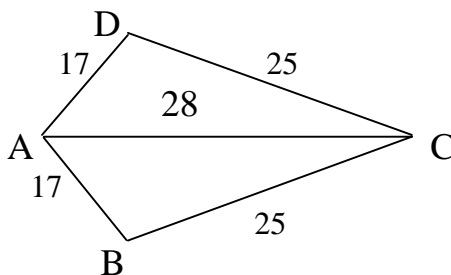
3 pts 1. On the number line, what number is halfway between $\frac{1}{7}$ and $\frac{1}{9}$?

Ans. _____

4 pts 2. If $f(x) = \frac{2}{3}x(x+1)(x+2)$, then find in simplest form $f(r) - f(r-1)$.

Ans. _____

5 pts 3. Find the area of the kite ABCD.



Ans. _____

Round 3 Individuals States 2011

3 pts 1. Simplify: $16 \times 4 \div 4 \times 16$ **Ans.** _____

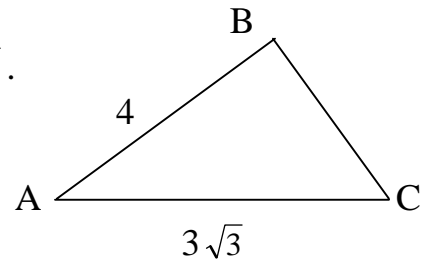
4 pts 2. Find the sum of the positive factors of 480.
Ans. _____

5 pts 3. A basketball is dropped from a height of 30 ft. and rebounds $\frac{2}{3}$ of the height from which it was dropped. If it continues in this fashion, how many feet will the ball travel until it comes to rest?
Ans. _____

Round 4 Individuals States 2011

3 pts 1. Before Andy started a 3-hour drive his odometer read 29792. When he reached his destination his odometer read another palindrome. If he never exceeded the speed limit of 75 mph, what was his greatest average speed in mph for the drive?
Ans. _____

4 pts 2. Find the length of side BC in the following triangle.
The measure of angle BAC is 30° , $AB = 4$ and $AC = 3\sqrt{3}$.



Ans. _____

5 pts 3. Solve: $\frac{x-4}{x-3} - \frac{x-3}{x-1} = \frac{2x^2-20}{x^2-4x+3}$.

Ans. _____

Round 5 Individuals States 2011

3 pts 1. If $\frac{x^x y^y}{x^y y^x} = \left(\frac{y}{x}\right)^m$, find m .

Ans. _____

4 pts 2. At a soda machine, on the average, 2 out of every 3 persons choose a pepsi low-calorie soda. If 6 people come to get a drink from the machine, what is the probability that exactly 4 of them choose a pepsi low-calorie soda?

Ans. _____

5 pts 3. Find all values of x , such that

$$\log_3(x + 3) + \log_3(3x + 1) = \log_3(6x^2 - 3x - 7).$$

Ans. _____

Round 6 Individuals States 2011

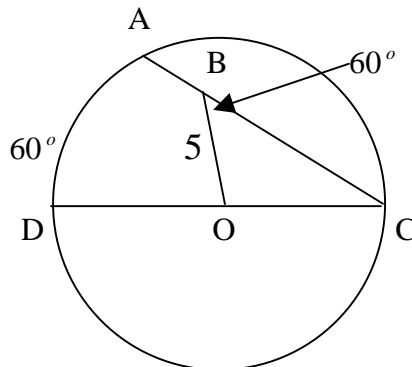
3 pts 1. Simplify: $\frac{2000^2}{1254^2 - 1246^2}$

Ans. _____

4 pts 2. Find the value of $\sin 105^\circ \cos 345^\circ - \cos 105^\circ \sin 345^\circ$

Ans. _____

5 pts 3. \overline{DC} is the diameter through center O . $OB = 5$, $m\angle CBO = 60^\circ$ and measure arc $AD = 60^\circ$. Find the length of segment AB .



Ans. _____

Round 1 Team States 2011

4 pts 1. Evaluate: $\frac{\log_3 \sqrt[5]{9} - \log_2 \sqrt[4]{8}}{\log_6 \sqrt[3]{36} + \log_5 \sqrt[6]{125}}$ **Ans.** _____

4 pts 2. In how many distinguishable ways can 2 apples from 5 apples and 2 oranges from 3 oranges be made? **Ans.** _____

6 pts 3. If $x - 2$ is a factor of $x^3 + kx^2 + 12x - 8$, find k . **Ans.** _____

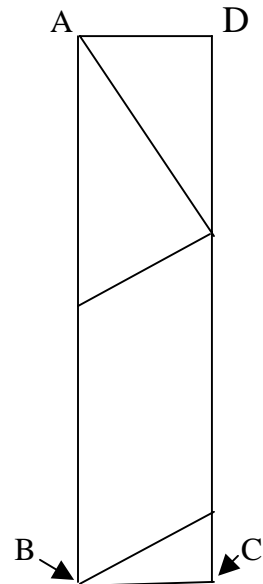
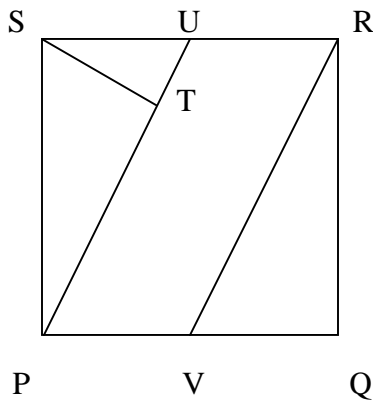
6 pts 4. Find the vertices of the ellipse whose equation is $16x^2 + 25y^2 - 96x + 200y + 144 = 0$. **Ans.** _____

6 pts 5. How many quarts of a solution which contains 50% salt must be mixed with 15 quarts a solution which is 90% salt, so as to make a solution which is 75% salt? **Ans.** _____

8 pts 6. If $-2^{-(2k+1)} + 2^{-(2k-1)} - 2^{-2k} = 2^P$, find P in simplest form. **Ans.** _____

8 pts 7. Let n be the number of ways that 10 dollars can be changed into dimes and quarters, with at least one of each coin being used. Find n . **Ans.** _____

8 pts 8. Square PQRS is cut into 4 pieces, where U and V are midpoints and $\overline{ST} \perp \overline{UP}$. These four pieces are then put together to form rectangle ABCD. Find the ratio of the base BC to the height AB of the rectangle.

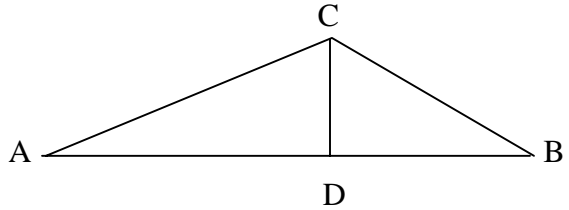


Ans. _____

Round 2 Team States 2011

4 pts 1. Simplify: $\frac{a - \frac{1}{b}}{b - \frac{1}{a}}$ **Ans.** _____

4 pts 2. In the figure, $\overline{CD} \perp \overline{AB}$, $AC = 863$,
 $m\angle A = 29^\circ 34'$, and $m\angle B = 42^\circ 16'$.
 Find BC to the nearest 100^{th} .



Ans. _____

6 pts 3. Find the sum of the x and y-intercepts of the perpendicular bisector of \overline{AB} , where $A = (5, 4)$ and $B = (9, 2)$.

Ans. _____

6 pts 4. If it takes 60 men 200 hours to pick 5000 bushels of grapes, how many hours will it take 20 men to pick 1000 bushels?

Ans. _____

6 pts 5. Find all values of x such that: $2x^4 + 7x^3 + 14x^2 + 11x - 10 = 0$.

Ans. _____

8 pts 6. In $\triangle ABC$, $m\angle ABC = 120^\circ$, $AB = 3$ and $BC = 4$. If perpendiculars are constructed to \overline{AB} at A and to \overline{BC} at C meet at point D, find the length of \overline{CD} .

Ans. _____

8 pts 7. The first three terms of a geometric sequence of real numbers are $x - 2$, $2x - 2$, and $8x - 2$, where each succeeding term is greater than the previous term. What is the numerical sum of the first 5 terms of the sequence?

Ans. _____

8 pts 8. Watson's winning a game is in jeopardy. His chances of winning are enhanced greatly, if he can guess correctly some of the next 6 questions. If his probability of answering a question correctly is .8, what is the probability that he answers at least three of the 6 questions correctly? Give exact answer.

Ans. _____

Seat A Blue Relay States 2011

n nickels and d dimes make 65 cents. If there are 8 coins, how many nickels are there?

Pass back: $5A + 5$ $A =$ Your answer.

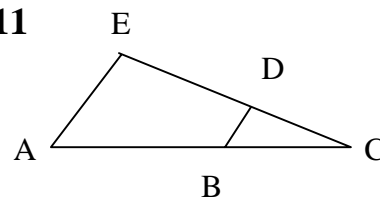
Seat B Blue Relay States 2011

Dan drove 7 hours at an average speed. Ed drove 6 hours at a speed which was 5 mph faster than Dan's, but covered 20 fewer miles. What was Dan's average speed?

Pass back: $\frac{2X + B}{2}$. $B =$ Your answer. $X =$ The number you will receive.

Seat C Blue Relay States 2011

$\overline{BD} \parallel \overline{AE}$, $BD = 6$, $CD = 8$, and $DE = 12$. Find AE .



Pass back: $\frac{X + 3C}{3}$. $C =$ Your answer. $X =$ The number you will receive.

Seat D Blue Relay States 2011

Find the product of the roots of $3x^2 - x - 14 = 0$.

Pass back: $\frac{X - 3D}{4}$. $D =$ Your answer. $X =$ The number you will receive.

Seat E Blue Relay States 2011

Evaluate: $2 \sin 75^\circ \cos 75^\circ$.

Pass in: $\frac{X + 4E}{5}$. $E =$ Your answer. $X =$ The number you will receive.

Seat A Green Relay States 2011

Sam has 75 cents in nickels and dimes. If he has 11 coins in all, how many dimes does he have?

Pass back: $5A + 5$. A = Your answer.

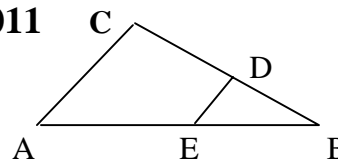
Seat B Green Relay States 2011

Pete drove 8 hours at an average speed. Rick drove 7 hours at an average speed 5 mph faster than Pete's speed and covered 5 fewer miles than Pete. How fast did Pete drive?

Pass back: $\frac{2X + B}{3}$. B = Your answer. X = The number you will receive.

Seat C Green Relay States 2011

$\overline{DE} \parallel \overline{AC}$, $DE = 6$, $BD = 10$, and $CD = 15$. Find AC.



Pass back: $\frac{3C + X}{5}$. C = your answer. X = The number you will receive.

Seat D Green Relay States 2011

Find the product of the roots of $4x^2 + 21x - 18 = 0$.

Pass back: $\frac{X}{2} - 3D$. D = Your answer. X = The number you will receive.

Seat E Green Relay States 2011

Evaluate: $\cos 75^\circ \cos 15^\circ + \sin 75^\circ \sin 15^\circ$.

Pass in: $\frac{2X + 6E}{9}$. E = Your answer. X = The number you will receive.

Seat A Pink Relay States 2011

If $x < y$, find the largest integral value for x that satisfies $5x + 2y < 47$.

Pass back: 100A. A = Your answer.

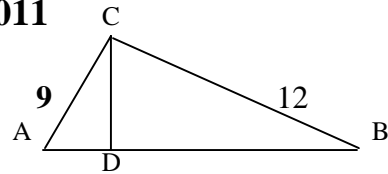
Seat B Pink Relay States 2011

Mr. Jones invested \$20,000, part at 6% and the rest at 8%. If the 6% investment yielded \$80 more than the 8% investment, how much was invested at 6%?

Pass back: $\frac{10B}{X}$ B = Your answer. X = The number you will receive.

Seat C Pink Relay States 2011

$m\angle ACB = 90^\circ$, $AC = 9$, $BC = 12$ and $\overline{CD} \perp \overline{AB}$, find CD .



Pass back: $\frac{CX}{20}$ C = Your answer. X = The number you will receive.

Seat D Pink Relay States 2011

Find the smallest integer x such that $|4x - 8| \leq 7x + 3$.

Pass back: $\frac{X}{D+8}$ D = Your answer. X = The number you will receive.

Seat E Pink Relay States 2011

In how many distinguishable ways can the letters of "Statemeet" be rearranged?

Pass in: $\frac{E}{9X}$ E = Your answer. X = The number you will receive.

Seat A Yellow Relay States 2011

If $x < y$ find the largest integral value of x such that $8x + 5y < 81$.

Pass back: $A + 14$. $A =$ Your answer.

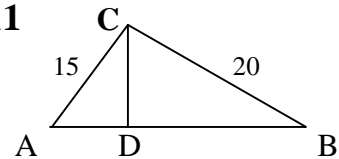
Seat B Yellow Relay States 2011

Mr. Jones invested \$20,000, part at 6% and the rest at 8%. If the 6% investment yielded \$80 more than the 8% investment, how much was invested at 8%?

Pass back: $\frac{B}{2X}$ $B =$ Your answer. $X =$ The number you will receive.

Seat C Yellow Relay States 2011

$\overline{AC} \perp \overline{BC}$, $\overline{CD} \perp \overline{AB}$, $AC = 15$ and $BC = 20$. Find CD .



Pass back: $\frac{3X}{10C}$ $C =$ Your answer. $X =$ The number you will receive.

Seat D Yellow Relay States 2011

Find the least integer x , such that $|5x - 12| \leq 3x + 2$.

Pass back: $10X + 9D$ $D =$ Your answer. $X =$ The number you will receive.

Seat E Yellow Relay States 2011

In how distinguishable many ways can the letters of “statesday” be rearranged?

Pass in: $\frac{E}{X + 2}$ $E =$ Your answer. $X =$ The number you will receive.

Solutions – Individuals Round 1

1. Trapezoid area: $\frac{1}{2}(15)(19 + 27) = 15(23) = 345$. **Ans. 345**

2. Let $n = \text{price}$. Then $05n = 1$, $n = 20$. Selling \$21. **Ans. 21**

3. $59 = a + 6d$ and $131 = a + 18d$. Subtracting: $72 = 12d \rightarrow d = 6$. Subbing back in:

$59 = a + 6(6) \rightarrow 23 = a$. 61^{st} term = $23 + 60(6) = 383$. Sum = $\frac{61}{2}(23 + 383) \rightarrow$

$61(406)/2 = 61(203) = 12,383$. **Ans. 12,383**

Individuals Round 2

1. $\frac{1}{2}\left(\frac{1}{7} + \frac{1}{9}\right) = \frac{1}{2}\left(\frac{16}{63}\right) = \frac{8}{63}$. **Ans. 8/63**

2. $f(r) = \frac{2}{3}r(r+1)(r+2)$, $f(r-1) = \frac{2}{3}(r-1)(r)(r+1)$. $f(r) - f(r-1) =$

$\frac{2}{3}r(r+1)[r+2 - (r-1)] = \frac{2}{3}r(r+1)(3) = 2r(r+1)$. **Ans. $2r(r+1)$**

3. Students familiar with the Pythagorean triplets may consider that the diagonals are both whole numbers. If so the other diagonal of the kite would have to be in an 8-15-17 right triangle. That would mean that the other triangle of the kite would have to be a 15-20-25 right triangle, which it is. So the area is $\frac{1}{2}$ the product of the diagonals $\rightarrow \frac{1}{2}(28)(30) = 420$. Otherwise they could use Heron's Formula for each triangle and double it:

$\sqrt{35(7)(10)(18)} = \sqrt{5 \cdot 7 \cdot 7 \cdot 5 \cdot 2 \cdot 2 \cdot 9} = 5 \cdot 7 \cdot 2 \cdot 3 = 210$. Doubled = 420. **Ans. 420**

Individuals Round 3

1. Order of operations is to multiply and divide left to right: $(16 \times 4) \div 4 \times 16 \rightarrow (64 \div 4) \times 16 \rightarrow 16 \times 16 = 256$. **Ans. 256**

2. As you express 480 as a product of two numbers, using the left number as the smaller and the right as the larger of the two factors. The numbers on the left get larger as the numbers on the right get smaller, until they are both equal or almost so. Thus:

1(480), 2(240), 3(160), 4(120), 5(96), 6(80), 8(60), 10(48), 12(40), 15(32), 16(30), 20(24). Adding the left numbers is 102, adding the right numbers is 1410. Sum = 1512. **Ans. 1512**

3. The down sequence is $30 + 20 + 20/3 \dots$. The up sequence is $20 + 20/3 + 40/9 \dots$

Sum = $30 + 2\left(\frac{20}{1 - \frac{2}{3}}\right) = 30 + 2(60) = 150$. **Ans. 150**

Individuals Round 4

1. The next three palindromes are 29892, 29992, 30003. $30003 \rightarrow 70\frac{1}{3}$ mph. **Ans. $70\frac{1}{3}$**

2. Dropping a perpendicular from B to meet \overline{AC} at D makes a 30-60-90 Δ where $BD = 2$ and $AD = 2\sqrt{3}$. Thus $DC = \sqrt{3}$. In triangle BDC, which is a right triangle, using the Pythagorean Theorem, $BC = \sqrt{7}$. **Ans. $\sqrt{7}$**

3. $\frac{x-4}{x-3} - \frac{x-3}{x-1} = \frac{2x^2-20}{x^2-4x+3} \Rightarrow (x-4)(x-1) - (x-3)(x-3) = 2x^2 - 20 \Rightarrow x^2 - 5x + 4 - (x^2 - 6x + 9) = 2x^2 - 20 \Rightarrow x - 5 = 2x^2 - 20$. Thus $0 = 2x^2 - x - 15$ or $0 = (2x+5)(x-3)$. Thus $x = 3$ or $-2\frac{1}{2}$. But x cannot be 3. **Ans. $-2\frac{1}{2}$**

Individuals Round 5

1. $\frac{x^x y^y}{x^y y^x} = \left(\frac{y}{x}\right)^m \Rightarrow \frac{y^y y^{-x}}{x^y x^{-x}} = \frac{y^{y-x}}{x^{y-x}} = \left(\frac{y}{x}\right)^{y-x} = \left(\frac{y}{x}\right)^m$. So $m = y - x$. **Ans. $y - x$**

2. $pf \cdot pf \cdot pf \cdot pf \cdot \cancel{pf} \cdot \cancel{pf} \left(\frac{6!}{4!2!}\right) = \left(\frac{2}{3} \cdot \frac{2}{3} \cdot \frac{2}{3} \cdot \frac{2}{3} \cdot \frac{1}{3} \cdot \frac{1}{3}\right)(15) = \frac{80}{243}$. **Ans. 80/243**

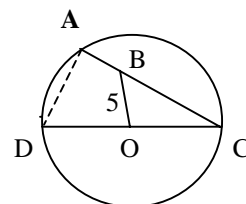
3. $\log_3(x+3) + \log_3(3x+1) = \log_3(6x^2 - 3x - 7) \Rightarrow (x+3)(3x+1) = 6x^2 - 3x - 7 \Rightarrow 3x^2 + 10x + 3 = 6x^2 - 3x - 7 \Rightarrow 0 = 3x^2 - 13x - 10 \Rightarrow 0 = (3x+2)(x-5)$. Thus $x = 5$ or $-2/3$. But $-2/3$ cannot be used. **Ans. 5**

Individuals Round 6

1. $\frac{2000^2}{1254^2 - 1246^2} = \frac{2000 \cdot 2000}{(1254+1246)(1254-1246)} = \frac{2000 \cdot 2000}{2500 \cdot 8} = \frac{4 \cdot 2000}{5 \cdot 8} = 4 \cdot 50 = 200$. **Ans. 200**

2. $\sin 105^\circ \cos 345^\circ - \cos 105^\circ \sin 345^\circ = \sin(-240) = \sqrt{3}/2$. **Ans. $\sqrt{3}/2$**

3. Since $\angle C = 30^\circ$, then ΔBOC is a 30-60-90 Δ , thus $BC = 10$. Connecting A to D, makes $m\angle A = 90^\circ$, so ΔADC is also a 30-60-90 Δ . Since $OC = 5\sqrt{3}$, then $DC = 10\sqrt{3}$, and $AD = 5\sqrt{3}$. Thus $AC = 15$, and since $BC = 10$, $AB = 5$. **Ans. 5**



Round 1 Team

1. $\frac{\log_3 \sqrt[5]{9} - \log_2 \sqrt[4]{8}}{\log_6 \sqrt[3]{36} + \log_5 \sqrt[6]{125}} = \frac{\frac{2}{5} - \frac{3}{4}}{\frac{2}{3} + \frac{1}{2}} = \frac{\frac{8}{20} - \frac{15}{20}}{\frac{4}{6} + \frac{3}{6}} = \frac{-\frac{7}{20}}{\frac{7}{6}} = -\frac{7}{20} \cdot \frac{6}{7} = -\frac{3}{10}$. **Ans. $-3/10$**

2. ${}_5C_2 \cdot {}_3C_2 = 10(3) = 30$. **Ans. 30**

$$\begin{array}{r}
x^2 + (k+2)x + (2k+16) \\
3. \ x - 2 \) \ x^3 + kx^2 + 12x - 8 \\
\quad - x^3 + 2x^2 \\
\quad \quad (k+2)x^2 + 12x \\
\quad \quad - (k+2)x^2 + 2(k+2)x \\
\quad \quad \quad (2k+16)x - 8 \\
\quad \quad \quad - (2k+16)x + 2(2k+16) \\
\quad \quad \quad \quad 4k + 32 - 8 = 0 \rightarrow 4k + 24 = 0. \ k = -6.
\end{array}$$

Ans. -6

4. $16x^2 + 25y^2 - 96x + 200y + 144 = 0 \rightarrow 16(x^2 - 6x + 9) + 25(y^2 + 8y + 16) = 400$
 $\frac{(x-3)^2}{25} + \frac{(y+4)^2}{16} = 1$. Center is (3, -4), vertices are at $(3 \pm 5, -4)$ **Ans. (8, -4), (-2, -4)**

5. $.50x + .90(15) = .75(x + 15) \rightarrow 50x + 90(15) = 75x + 75(15) \rightarrow 15(15) = 25x$.
Thus $x = 9$. **Ans. 9**

6. $-2^{-(2k+1)} + 2^{-(2k-1)} - 2^{-2k} = 2^p \rightarrow -2^{-2k-1} + 2^{-2k+1} - 2^{-2k} = 2^p \rightarrow -\frac{1}{2}(2^{-2k}) + 2(2^{-2k}) - 2^{-2k}$
 $(2^{-2k})(-\frac{1}{2} + 2 - 1) = (2^{-2k})(1/2) = 2^{-2k-1} = 2^p$. So $p = -2k - 1$. **Ans. -2k - 1**

7. There must be at least 5 dimes, and multiples of 5 dimes. Thus .50, 1.00, 1.50, ..., but can be no more than 9.50 or else it would be all dimes. So $950 = 50 + (n - 1) 50 \rightarrow 900 = (n - 1) 50 \rightarrow 18 = n - 1$. So $n = 19$. **Ans. 19**

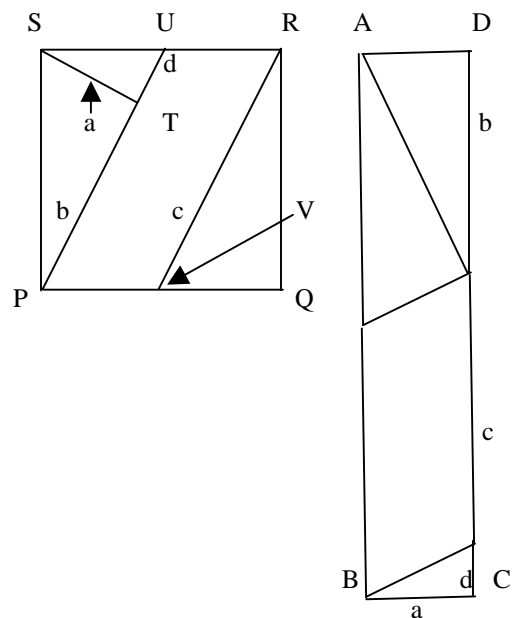
8. Let $SP = 2$. The three right triangles are all similar, with side ratio's of 1, 2, $\sqrt{5}$. So $a = \frac{2}{\sqrt{5}}$, $b = \frac{4}{\sqrt{5}}$,

$d = \frac{1}{\sqrt{5}}$ and $c = \sqrt{5}$. In rectangle ABCD, $CB = \frac{2}{\sqrt{5}}$, and

$$AB = DC = b + c + d = \frac{4}{\sqrt{5}} + \sqrt{5} + \frac{1}{\sqrt{5}} =$$

$$\frac{4}{\sqrt{5}} + \frac{5}{\sqrt{5}} + \frac{1}{\sqrt{5}} = \frac{10}{\sqrt{5}}. \text{ The ratio of } \frac{BC}{AB} = \frac{\frac{2}{\sqrt{5}}}{\frac{10}{\sqrt{5}}} = \frac{1}{5}.$$

Ans. 1/5



Round 2 Team

$$1. \frac{a - \frac{1}{b}}{b - \frac{1}{a}} = \frac{\frac{ab-1}{b}}{\frac{ab-1}{a}} = \frac{ab-1}{b} \cdot \frac{a}{ab-1} = \frac{a}{b}.$$

Ans. a/b

$$2. \sin 29^\circ 34' = \frac{CD}{863}, \text{ so } CD = 863 \sin 29^\circ 34'. \quad \sin 42^\circ 16' = \frac{CD}{BC}, \text{ so } BC = \frac{CD}{\sin 42^\circ 16'}.$$

$$\text{Thus } BC = \frac{863 \sin 29^\circ 34'}{\sin 42^\circ 16'} = 633.1349.$$

Ans. 633.13

$$3. \text{ The midpoint of } (5, 4) \text{ and } (9, 2) \text{ is } (7, 3). \text{ Slope through the two points: } \frac{4-2}{5-9} = -\frac{1}{2}.$$

Slope of perpendicular bisector = 2. Equation form $y = 2x + b$, or $2x - y = c$. Plugging in $(7, 3)$: $2(7) - 3 = c$. Thus the equation is $2x - y = 11$. x -i = $5\frac{1}{2}$, y -i = -11 . **Ans. $-5\frac{1}{2}$**

4. $k = \frac{\text{men} \cdot \text{hours}}{\text{bushels}}$ since if the men are increased while the number of bushels stays the same, then the number of hours will decrease. Therefore men and hours are inversely proportional. Keeping the hours the same, if the men are increased the number of bushels also increases, a direct proportion. Thus $\frac{60 \cdot 200}{5000} = \frac{20h}{1000} \rightarrow 60 \cdot 200 = 100h$. **Ans. 120**

$$5. \begin{array}{r} -2 \left| \begin{array}{cccc} 2 & 7 & 14 & 11 & -10 \\ & -4 & -6 & -16 & 10 \end{array} \right. \end{array} \text{ Taking } \frac{1}{2} \text{ of } 2 \ 4 \ 10: \ 1 \ 2 \ 5 \text{ produces } x^2 + 2x + 5 = 0.$$

$$\begin{array}{r} \frac{1}{2} \left| \begin{array}{cccc} 2 & 3 & 8 & -5 \\ & 1 & 2 & 5 \end{array} \right. \end{array} \text{ By completing the square: } x^2 + 2x + 1 = -5 + 1.$$

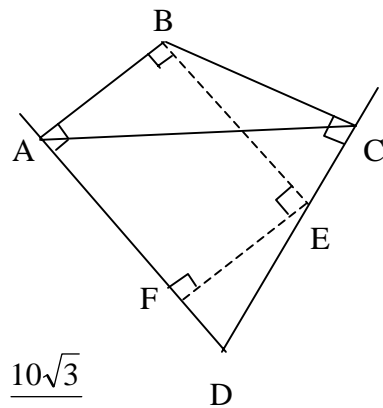
$$\begin{array}{r} 2 \ 4 \ 10 \end{array} \text{ Thus } (x + 1)^2 = -4 \rightarrow x + 1 = \pm 2i, x = -1 \pm 2i. \text{ Ans. } \frac{1}{2}, -2, -1 \pm 2i$$

6. In the figure, since $m\angle ABC = 120^\circ$, then $m\angle D = 60^\circ$ because the sum of the angles of a quadrilateral is 360° .

Dropping a perpendicular from B to \overline{DC} at E and then dropping a perpendicular from E to \overline{AD} at F, forms two 30-60-90 Δ 's, ΔBDC and ΔEFD . Since $BC = 4$, then

$CE = \frac{4}{\sqrt{3}}$. $EF = AB$ because they are opposite sides of a

rectangle, then $DE = \frac{6}{\sqrt{3}}$. Thus $CD = \frac{10}{\sqrt{3}}$ or $\frac{10\sqrt{3}}{3}$. **Ans. $\frac{10\sqrt{3}}{3}$**



7. The 2nd term divided by the first will give common ratio, so: $\frac{2x-2}{x-2} = \frac{8x-2}{2x-2}$, thus

$$(2x-2)(2x-2) = (x-2)(8x-2) \rightarrow 4x^2 - 8x + 4 = 8x^2 - 18x + 4 \rightarrow 0 = 4x^2 - 10x.$$

Factoring: $2x(2x-5) = 0$. So $x = 0$ or $2\frac{1}{2}$. Since each succeeding term is greater the previous, $x = 2\frac{1}{2}$. Subbing in, terms are $\frac{1}{2}, 3, 18, 108, 648$. Sum = $777\frac{1}{2}$. **Ans. $777\frac{1}{2}$**

Seat D Green Relay

$$4x^2 + 21x - 18 = 0, \text{ Product} = -18/4 = -4\frac{1}{2}. \text{ Pass: } \frac{\frac{X}{2} - 3D}{7} = \frac{\frac{15}{2} - 3\left(\frac{-9}{2}\right)}{7} = \frac{\frac{42}{2}}{7} = 3.$$

Ans. $-4\frac{1}{2}$, Pass: 3**Seat E Green Relay**

$$\cos 75^\circ \cos 15^\circ + \sin 75^\circ \sin 15^\circ = \cos (75^\circ - 15^\circ) = \cos 60^\circ = \frac{1}{2}.$$

$$\text{Pass: } \frac{2X + 6E}{9} = \frac{2(3) + 6(1/2)}{9} = \frac{9}{9} = 1.$$

Ans. E = $\frac{1}{2}$, Pass: 1**Seat A Pink Relay**

$$(1) 5x + 2y < 47, (2) x < y \rightarrow 2x - 2y < 0. \text{ Adding (1) and (2): } 7x < 47, \text{ so } x < 6\frac{5}{7}, \text{ so}$$

largest integral value for x is 6. Pass: $100A = 100(6) = 600.$ **Ans. A = 6, Pass: 600****Seat B Pink Relay**

$$.06x = .08(20,000 - x) + 80 \rightarrow 6x = 160,000 - 8x + 8,000 \rightarrow 14x = 168,000, x = 12,000.$$

$$\text{Pass: } \frac{10B}{X} = \frac{10(12,000)}{600} = 200.$$

Ans. B = 12,000, Pass: 200**Seat C Pink Relay**

$$AB = 15 \text{ and by area: } 9(12) = 15h, \text{ so } h = \frac{108}{15} = 7\frac{1}{5} \text{ or } 7.2. \text{ Pass: } \frac{CX}{20} = \frac{7.2(200)}{20} = 7.2(10)$$

Ans. C = 7.2, Pass: 72**Seat D Pink Relay**

$$|4x - 8| \leq 7x + 3 \rightarrow \text{Critical points are at (1) } 4x - 8 = 7x + 3 \text{ and (2) } 4x - 8 = -7x - 3$$

In (1): $-11 = 3x$, so $x = -3\frac{2}{3}$. In (2): $11x = 5$, so $x = 5/11$. Only numbers in the interval $x \geq 5/11$ work. So smallest integer is 1. Pass: $\frac{X}{D+8} = \frac{72}{1+8} = 8.$ **Ans. D = 1, Pass: 8****Seat E Pink Relay**

$$\frac{9!}{3!} = \frac{9 \cdot 8 \cdot 7 \cdot 6 \cdot 5 \cdot 4 \cdot 3!}{3 \cdot 2 \cdot 3!} = 9 \cdot 8 \cdot 7 \cdot 5 \cdot 4 = 72 \cdot 140 = 10,080. \text{ Pass: } \frac{E}{9X} = \frac{10,080}{9(8)} = \frac{72(140)}{9(8)} = 140.$$

Ans. E = 10,080, Pass: 140**Seat A Yellow Relay**(1) $8x + 5y < 81$ and (2) $x < y$. In (2) $5x - 5y < 0$. Adding this to (1): $13x < 81$, so $x < 6\frac{3}{13}$.Thus the largest integer for x is 6. Pass: $A + 14 = 20.$ **Ans. A = 6, Pass: 20**

Seat B Yellow Relay

Answer from Pink B - \$8,000. Pass: $\frac{B}{2X} = \frac{8000}{2(20)} = 200$. **Ans. B = 8,000, Pass: 200**

Seat C Yellow Relay

AB = 25. So through area: $15(20) = 25h \rightarrow h = 12$. Pass: $\frac{3X}{10C} = \frac{3(200)}{10(12)} = 5$

Ans. C = 12, Pass: 5

Seat D Yellow Relay

$|5x - 12| \leq 3x + 2 \rightarrow$ Critical points are at (1) $5x - 12 = 3x + 2$ and at (2) $5x - 12 = -3x - 2$.

In (1): $2x = 14$, $x = 7$. In (2): $8x = 10$, $x = 1\frac{1}{4}$. Only the interval $1\frac{1}{4} \leq x \leq 7$ works. The least integer is 2. Pass: $10X + 9D = 10(5) + 9(2) = 68$.

Ans. D = 2, Pass: 68

Seat E Yellow Relay

$\frac{9!}{2!2!2!} = 9 \cdot 7 \cdot 6 \cdot 5 \cdot 4 \cdot 3 \cdot 2 = 63(720) = 45,360$. Pass: $\frac{E}{X+2} = \frac{63(720)}{68+2} = \frac{63(720)}{70} = 9(72) = 648$.

Ans. 45,360, Pass: 648

Answer Sheet States 2011

Round 1 Individuals

1. 345
2. 21
3. 12,383

Round 2 Individuals

1. $8/63$
2. $2r(r + 1)$ or $2r^2 + 2r$
3. 420

Round 3 Individuals

1. 256
2. 1512
3. 150 or 150 ft

Round 4 Individuals

1. $70\frac{1}{3}$ m/h or $70\frac{1}{3}$ (211/3 or $70.\bar{3}$)
2. $\sqrt{7}$
3. $-5/2$ or $-2\frac{1}{2}$ or -2.5

Round 5 Individuals

1. $y - x$
2. 80/243
3. 5

Round 6 Individuals

1. 200
2. $\sqrt{3}/2$
3. 5

Relays

Blue	Ans.	Pass	Green	Ans.	Pass	Pink	Ans.	Pass	Yellow	Ans.	Pass
A	3	20	A	4	25	A	6	600	A	6	20
B	50	45	B	40	30	B	12,000	200	B	8,000	200
C	15	30	C	15	15	C	7.2	72	C	12	5
D	$-14/3$	11	D	$-4\frac{1}{2}$	3	D	1	8	D	2	68
E	$1/2$	$3/2$	E	$1/2$	1	E	10,080	140	E	45,360	648

Round 1 Team

1. $-3/10$ or $-.3$
2. 30
3. -6
4. $(8, -4), (-2, -4)$
5. 9 or 9 quarts
6. $-2k - 1$
7. 19
8. $1/5$

Round 2 Team

1. a/b
2. 633.13
3. $-5\frac{1}{2}$ or $-11/2$ or -5.5
4. 120 or 120 hr
5. $1/2, -2, -1 \pm 2i$
6. $\frac{10\sqrt{3}}{3}$
7. $777\frac{1}{2}$ or 777.5 or $1555/2$
8. .98304